

BBM 205 - Discrete Structures: Midterm Exam
Date: 26.11.2018, Time: 16:30 - 18:00

Name:

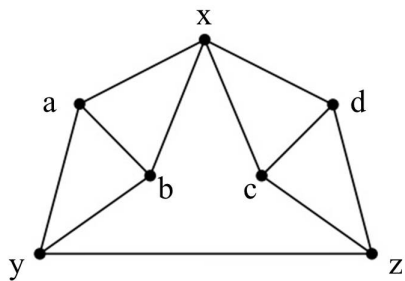
Student ID:

Question:	1	2	3	4	5	6	7	8	9	Total
Points:	12	9	10	10	15	10	12	12	10	100
Score:										

1. (12 points) Use the extended Euclid algorithm to find integers x and y that satisfy

$$x \cdot 2328 + y \cdot 440 = \gcd(2328, 440).$$

2. (9 points) Let G be the graph below. Carefully explain why $\chi(G) = 4$.



3. (10 points) Prove that for every positive integer n ,

$$1 \cdot 2 + 2 \cdot 3 + \cdots + n(n+1) = n(n+1)(n+2)/3.$$

4. (10 points) Prove that 3 divides $n^3 + 2n$ whenever n is a positive integer.

5. (15 points) Indicate **true or false** for the following statements about the greatest common divisor, and **provide counterexamples for those that are false**.

(a) If $\gcd(a, b) \neq 1$ and $\gcd(b, c) \neq 1$, then $\gcd(a, c) \neq 1$.

(b) If $a|bc$ and $\gcd(a, b) = 1$, then $a|c$.

(c) $\gcd(a^n, b^n) = (\gcd(a, b))^n$.

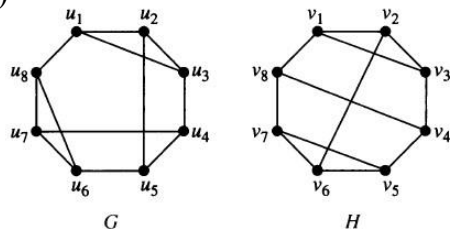
(d) $\gcd(1 + a, 1 + b) = 1 + \gcd(a, b)$.

(e) If an integer linear combination of a and b equals 1, then so does some integer linear combination of a and b^2 .

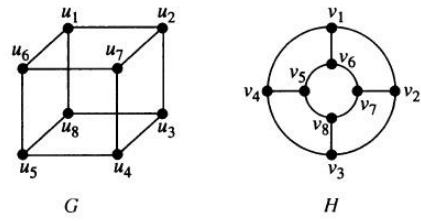
6. (10 points) Prove that if $m + n$ and $n + p$ are even integers, where m , n and p are integers, then $m + p$ is even.

7. (12 points) Determine if the two graphs below are isomorphic. If they are, provide an isomorphism function. If not, explain why.

a)



b)



8. (a) (6 points) Draw the following graphs: K_5 , Q_2 , Q_3 . How many edges and vertices does each graph have?

(b) (3 points) Is there a graph (not necessarily simple) with five vertices with degrees $\{3, 2, 1, 3, 2\}$. If yes, give an example. If no, explain why.

(c) (3 points) Represent these graphs with an adjacency matrix: C_4 , P_4 .

9. (10 points) Use proof by contradiction to show that at least 10 of any 64 days chosen must fall on the same day of the week.