

BBM 205 - Discrete Structures: Midterm Exam

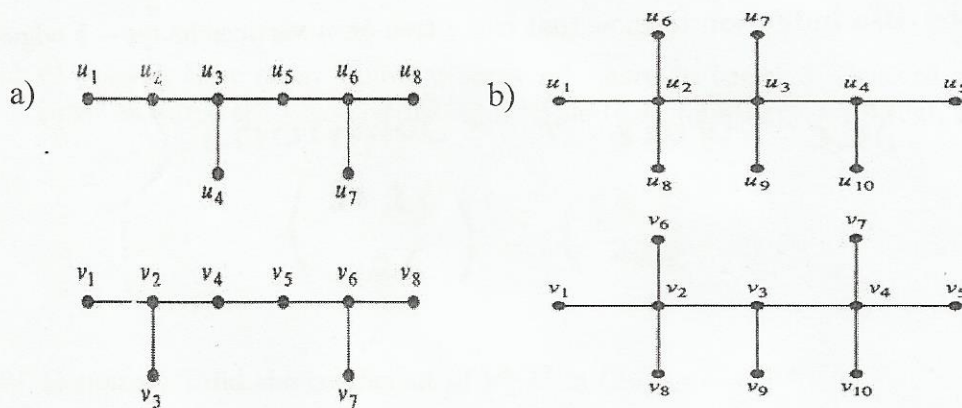
Date: 1.2.2019, Time: 10:00 - 12:00

Name:

Student ID:

Question:	1	2	3	4	5	6	7	8	9	Total
Points:	10	8	8	20	12	8	16	8	10	100
Score:										

1. (10 points) Determine if the two graphs in each part below are isomorphic. If they are, provide an isomorphism function. If not, explain why.



a) The graphs are not isomorphic.

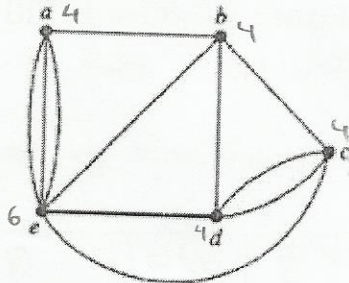
The distance between the two vertices with degree 3 is 2 in the first graph and 3 in the second graph.

b) Not isomorphic.

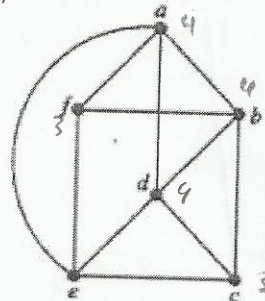
The distance between the two degree 4 vertices is 1 in the first graph and 2 in the second graph.

2. (8 points) Determine whether the given graph has an Eulerian tour. Construct such a circuit when one exists. If no Eulerian tour exists, determine whether the graph has an Eulerian walk and construct such a walk if one exists.

a)



b)



a) The order of visits to vertices is: (Euler Tour)
 $b - c - d - e - d - b - e - a - e - a - b$

b) No Euler tour, because c and f have degree 3.

Euler walk: $f - a - b - f - e - a - d - b - c - d - e - c$

3. (8 points) Use induction to show that every tree on n vertices has $n - 1$ edges.

See Quiz 7 Solutions.

4. (a) (4 points) We have 9 balls, numbered 1 through 9, and 27 bins. How many different ways are there to distribute these 9 balls among the 27 bins? Assume the bins are distinguishable (e.g., numbered 1 through 27).

$$27^9$$

- (b) (4 points) We throw 9 identical balls into 7 bins. How many different ways are there to distribute these 9 balls among the 7 bins such that **no bin is empty**? Assume the bins are distinguishable (e.g., numbered 1 through 7).

$$\binom{7}{1} + \binom{7}{2} = 7 + \frac{7 \cdot 6}{2} = 28$$

- (c) (4 points) How many different ways are there to throw 9 identical balls into 27 bins? Assume the bins are distinguishable (e.g., numbered 1 through 27).

$$\binom{9+26}{26} = \binom{35}{26}$$

- (d) (4 points) Find the coefficient of $x^4 y z^7$ in $(2x + y - 7z)^{12}$.

$$2^4 \cdot 1^1 \cdot (-7)^7 \cdot \binom{12}{4} \binom{8}{7}$$

- (e) (4 points) Use **pigeonhole principle** to show that at least 10 of any 64 days chosen must fall on the same day of the week.

$$\left\lceil \frac{64}{7} \right\rceil = 10 \quad \checkmark$$

5. (12 points) Find all solutions of the recurrence relation $a_n = -5a_{n-1} - 6a_{n-2} + 42 \cdot 4^n$ with initial condition $a_1 = 56$ and $a_2 = 278$.

$$\textcircled{*} a_n + 5a_{n-1} + 6a_{n-2} = 42 \cdot 4^n, \quad a_1 = 56, \quad a_2 = 278.$$

$$t^2 + 5t + 6 = 0$$

$$(t+2)(t+3) = 0$$

$$\textcircled{1} a_n = A(-2)^n + B(-3)^n$$

is the solution for the homogeneous part.

$$\textcircled{2} a_n = C \cdot 4^n$$

is the solution for the non-hom. part.

Combine $\textcircled{1}$ & $\textcircled{2}$:

$$a_n = A(-2)^n + B(-3)^n + C \cdot 4^n$$

To find C , substitute into the equation $\textcircled{*}$: $C \cdot 4^n + 5C \cdot 4^{n-1} + 6C \cdot 4^{n-2} = 42 \cdot 4^n$

Using initial conditions, we find A & B : $\text{use } (C=16)$ (Divide by 4^{n-2})

$$(16 + 20 + 6)C = 42 \cdot 16$$

$$\boxed{C = 16}$$

$$\begin{array}{l} \boxed{n=1} \\ \boxed{n=2} \end{array} \left. \begin{array}{l} A \cdot (-2) + B(-3) + 16 \cdot 4 = 56 \\ A \cdot (4) + B \cdot 9 + 16 \cdot 16 = 278 \end{array} \right\} \begin{array}{l} A = 1 \\ B = 2 \end{array}$$

$$\text{So, } \boxed{a_n = (-2)^n + 2(-3)^n + 16 \cdot 4^n}$$

6. (a) (4 points) What is the probability that a positive integer not exceeding 100 selected at random is divisible by 3 and 5?

$$\text{Let } A := \{x \in \mathbb{Z}^+ : 3|x \text{ and } x < 100\}$$

$$B := \{x \in \mathbb{Z}^+ : 5|x \text{ and } x < 100\}$$

$$A \cap B := \{x \in \mathbb{Z}^+ : 15|x \text{ and } x < 100\}$$

$$\Pr(A \cap B) = \frac{\lfloor \frac{99}{15} \rfloor}{99} = \frac{6}{99}$$

- (b) (4 points) When we randomly select a permutation of $\{1, 2, \dots, n\}$, what is the probability that n precedes 1 and 1 precedes 2?

See Quiz 11 solutions

7. (a) (5 points) Find a recurrence relation for the number of ways to climb n stairs if the person climbing the stairs has very long legs and can take one stair, two stairs or three stairs at a time.

$$a_n = a_{n-1} + a_{n-2} + a_{n-3}.$$

- (b) (5 points) What are the initial conditions?

$$a_1 = 1, a_2 = 2, a_3 = 1 + 2 + 1 = 4$$

- (c) (6 points) How many ways can this person climb a flight of six stairs? (Use the recursive relation in part (a) to answer this.)

$$a_4 = a_1 + a_2 + a_3 = 1 + 2 + 4 = 7$$

$$a_5 = a_4 + a_3 + a_2 = 7 + 4 + 2 = 13$$

$$a_6 = a_5 + a_4 + a_3 = 13 + 7 + 4 = 24$$

8. Suppose that 4% of the patients tested in a clinic are infected with avian influenza. Also, suppose that when a blood test for avian influenza is given, 97% of the patients infected with avian influenza test positive and that 2% of the patients not infected with avian influenza test positive. What is the probability that

- (a) (4 points) a patient is infected with avian influenza?

Let A : event of having avian influenza
 B : event of testing positive

$$Pr(B) = Pr(A \cap B) + Pr(\bar{A} \cap B) = Pr(A) \cdot Pr(B|A) + Pr(\bar{A}) \cdot Pr(B|\bar{A}) = 0.04 \cdot 0.97 + 0.96 \cdot 0.03$$

- (b) (4 points) a patient testing positive for avian influenza with this test is not infected with it? (You do not need to finish and simplify the calculation.)

$$Pr(\bar{A}|B) = \frac{Pr(\bar{A}) \cdot Pr(B|\bar{A})}{Pr(B)}$$

$$= \frac{0.96 \cdot 0.03}{0.04 \cdot 0.97 + 0.96 \cdot 0.03}$$

$$= \frac{0.0288}{0.04 \cdot 0.97 + 0.96 \cdot 0.03}$$

if you assumed this is 0.04, also accepted since the question is not stated clearly.

9. (10 points) Give a combinatorial proof to show that the equality below is true.

$$\sum_{k=1}^n k \binom{n}{k}^2 = n \binom{2n-1}{n-1}.$$

Both sides count the number of ways to pick a committee of n professors from a group of n Math professors and n CS professors such that the chair is a math professor.

1st way: First pick a chair from Math: n ways
Then pick the rest of the committee: $\binom{2n-1}{n-1}$ ways
Product rule gives $n \cdot \binom{2n-1}{n-1}$ ways

2nd way: First pick k professors from Math in $\binom{n}{k}$ ways and $n-k$ professors from CS in $\binom{n}{n-k} = \binom{n}{k}$ ways, and then pick the chair in k different ways. Product rule gives $\binom{n}{k} \cdot \binom{n}{n-k} \cdot k = k \cdot \binom{n}{k}^2$ different ways.

But also, we can pick k from values $1, 2, \dots, n$.

So adding this for every different k , we get

$$\sum_{k=1}^n k \cdot \binom{n}{k}^2$$