

BBM205 Midterm Exam II

Time: 9:30-11:30

11 December 2023

Question:	1	2	3	4	5	6	7	8	9	Total
Points:	10	12	10	10	12	9	16	9	12	100
Score:										

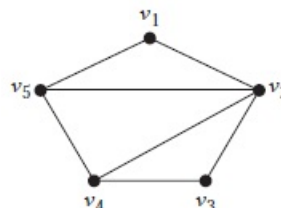
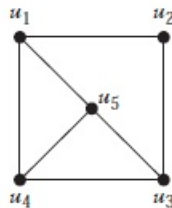
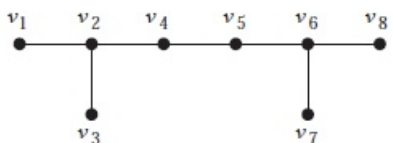
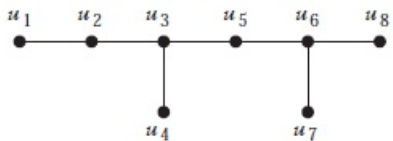
Name, Surname, ID: _____ Instructor: _____

In each question, show all your work to receive full credit.

1. (10 points) Prove that a cycle (as a graph) with k vertices is bipartite only if k is even.

Solution: Assuming C_k is bipartite show that k is even. We can prove by contrapositive. Let k be odd and show that C_k is not bipartite:
Let $k = 2r + 1$ and let the vertex set of C_k be $\{v_1, v_2, \dots, v_{2r}, v_{2r+1}\}$. If we were to follow a coloring process using red and blue so that every edge has both red and blue endpoints (to check if it is bipartite), we would color v_1 randomly, say with red. Then, v_2 would have to be blue, v_3 red, and so on. We observe that if v_1 is red, then v_{2i+1} is also red for all $i = 1, 2, \dots, r$. However, v_1 and v_{2r+1} are neighbors and both red. This shows that C_k is not bipartite when k is odd.

2. (12 points) Determine whether the following graph pairs are isomorphic or not. Justify your answer to receive full credit.



Solution: The first pair is not isomorphic, since one graph has a vertex with degree 3 (u_3) that has two neighbors with degree 2 and one neighbor with degree 1. There is no such vertex in the other graph.

The second pair is also not isomorphic, since one graph has a vertex with degree 4 (v_2), but the other does not.

Name:

3. Let $f : \mathbb{Z} \rightarrow \mathbb{N}$ be defined by

$$f(x) = \begin{cases} 2x - 1 & \text{if } x > 0 \\ -2x & \text{if } x \leq 0 \end{cases}$$

- (a) (5 points) Is f one-to-one function? Clearly show your steps and reasons to get a credit.

Solution: Assume that x_1 and $x_2 \in \mathbb{Z}$ and $f(x_1) = f(x_2)$. Then either $f(x_1), f(x_2)$ are both even or both odd. If they are both even, then $f(x_1) = f(x_2) \Rightarrow -2x_1 = -2x_2 \Rightarrow x_1 = x_2$. Otherwise, $f(x_1), f(x_2)$ are both odd and $f(x_1) = f(x_2) \Rightarrow 2x_1 - 1 = 2x_2 - 1 \Rightarrow 2x_1 = 2x_2 \Rightarrow x_1 = x_2$. Consequently, the function f is one-to-one.

- (b) (5 points) Is f onto function? Clearly show your steps and reasons to get a credit.

Solution: Let $n \in \mathbb{N}$. If n is even, then $(-n/2) \in \mathbb{Z}$ and $(-n/2) < 0$, and $f(-n/2) = -2(-n/2) = n$. If n is odd, $(n+1)/2 \in \mathbb{Z}$ and $(n+1)/2 > 0$, and $f((n+1)/2) = 2[(n+1)/2] - 1 = (n+1) - 1 = n$. Thus, f is onto.

Name:

4. (10 points) For $n \geq 0$, let F_n denotes the n^{th} Fibonacci number. Prove that for any positive integer n ,

$$\sum_{i=1}^n \frac{F_{i-1}}{2^i} = 1 - \frac{F_{n+2}}{2^n}$$

Solution:

Proof: By Mathematical Induction

Basis Step: For $n = 1$

$$\sum_{i=1}^1 \frac{F_{i-1}}{2^i} = F_0/2 = 0 = 1 - (2/2) = 1 - \frac{F_3}{2} = 1 - \frac{F_{1+2}}{2^1}$$

so the result holds for the first case.

Inductive Step: Assuming the given statement for $n = k$ is true,

$$\sum_{i=1}^k \frac{F_{i-1}}{2^i} = 1 - \frac{F_{k+2}}{2^k}$$

For $n = k+1$,

$$\begin{aligned} \sum_{i=1}^{k+1} \frac{F_{i-1}}{2^i} &= \sum_{i=1}^k \frac{F_{i-1}}{2^i} + \frac{F_k}{2^{(k+1)}} = 1 - \frac{F_{k+2}}{2^k} + \frac{F_k}{2^{(k+1)}} = 1 + (1/2^{(k+1)})[F_k - 2F_{k+2}] \\ &= 1 + (1/2^{(k+1)})[(F_k - F_{k+2}) - F_{k+2}] = 1 + (1/2^{(k+1)})[-F_{k+1} - F_{k+2}] = \\ &= 1 - (1/2^{(k+1)})(F_{k+1} + F_{k+2}) = 1 - (F_{k+3}/2^{(k+1)}) \end{aligned}$$

From the basis and inductive steps, it follows from the Principle of Mathematical Induction that

$$\forall n \in \mathbb{Z}^+ \sum_{i=1}^n \frac{F_{i-1}}{2^i} = 1 - \frac{F_{n+2}}{2^n}$$

5. (12 points) Prove for all $n \geq 1$,

$$\sum_{i=1}^n (i)(i!) = (n+1)! - 1$$

Solution:

Proof: By Mathematical Induction

$$S(n) : \sum_{i=1}^n (i)(i!) = (n+1)! - 1$$

Basis Step: For $n = 1$,

$$\sum_{i=1}^1 (i)(i!) = 1 = (1+1)! - 1$$

So $S(1)$ is true.

Inductive Step: Assume the truth of $S(k)$, $n = k$,

$$\sum_{i=1}^k (i)(i!) = (k+1)! - 1$$

For $n = k + 1$,

$$\begin{aligned} \sum_{i=1}^{k+1} (i)(i!) &= \sum_{i=1}^k (i)(i!) + (k+1)(k+1)! = (k+1)! - 1 + (k+1)(k+1)! = \\ & [1 + (k+1)](k+1)! - 1 = (k+2)(k+1)! - 1 = (k+2)! - 1 \end{aligned}$$

Thus, $S(k) \Rightarrow S(k+1)$ and $S(1)$ is true. From the basis and inductive steps, it follows from the Principle of Mathematical Induction that the following statement is true for all $n \geq 1$.

Name:

6. (9 points) Let $A, B, C \subseteq U$. Prove that $(A \cap B) \cup C = A \cap (B \cup C)$ if and only if $C \subseteq A$ without using Venn diagram or membership table.

Solution: Suppose that $(A \cap B) \cup C = A \cap (B \cup C)$ and that $x \in C$. Then $x \in C \Rightarrow x \in (A \cap B) \cup C \Rightarrow x \in A \cap (B \cup C) \subseteq A$, so $x \in A$, and $C \subseteq A$. Conversely, suppose that $C \subseteq A$

1. If $y \in (A \cap B) \cup C$ then $y \in A \cap B$ or $y \in C$.

a) $y \in A \cap B \Rightarrow y \in (A \cap B) \cup (A \cap C) \Rightarrow y \in A \cap (B \cup C)$

b) $y \in C \Rightarrow y \in A$ since $C \subseteq A$. Also $y \in C \Rightarrow y \in B \cup C$. Thus, $y \in A \cap (B \cup C)$.

In both (a) and (b) cases, we have $y \in A \cap (B \cup C)$ so $(A \cap B) \cup C \subseteq A \cap (B \cup C)$

2. Assume $z \in A \cap (B \cup C)$. Then $z \in A \cap (B \cup C) = (A \cap B) \cup (A \cap C) \subseteq (A \cap B) \cup C$.

From (1) and (2), it follows that $(A \cap B) \cup C = A \cap (B \cup C)$

7. For a relation R given as follows:

$R = \{(a, b) | (a, b) \in \mathcal{R} \times \mathcal{R}, |a - b| \leq 0.01\}$ Determine if R has the following properties. Justify each answer.

(a) (4 points) Reflexive

Solution: Reflexive, since $|a - a| = 0 \leq 0.01$

(b) (4 points) Symmetric

Solution: Symmetric, since $|a - b| = |b - a|$

(c) (4 points) Anti-Symmetric

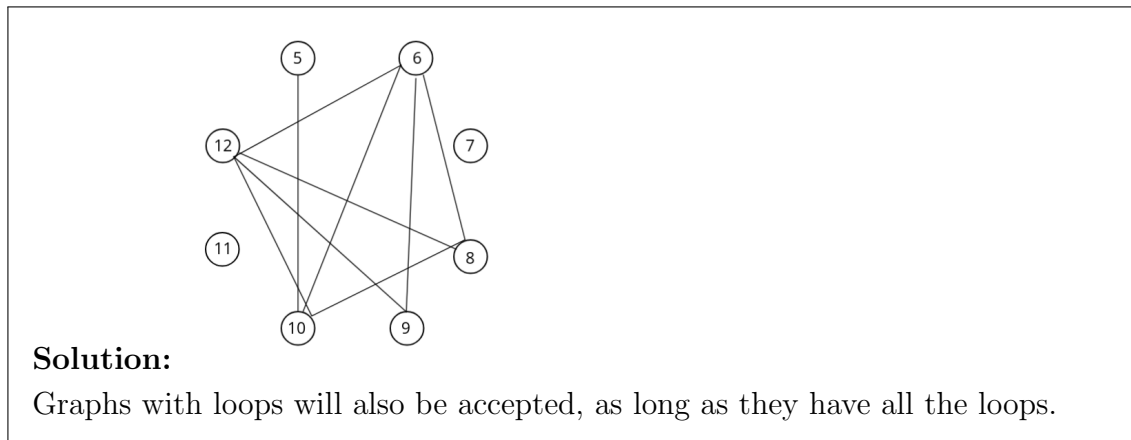
Solution: Not anti-symmetric, since for $a = 2.01$ and $b = 2.00$ $(a,b) \in R$ and $(b,a) \in R$ but $(a \neq b)$

(d) (4 points) Transitive

Solution: Not transitive, since for $a = 2.01$, $b = 2.00$, and $c = 1.99$, $(a,b) \in R$ and $(b,c) \in R$ but $(a,c) \notin R$

Name:

8. Consider the predicate “ $P(x,y)$: x and y are relatively prime” and the graph $G = (V, E)$ where $V = \{x \in \mathbb{Z} \mid x > 4 \wedge x < 13\}$ and $E = \{(x \in V, y \in V) \mid \neg P(x, y)\}$.
- (a) (3 points) Draw G .



- (b) (3 points) What is the largest complete subgraph of G (mention the vertices in it)?

Solution: $K_4 = \{6, 8, 10, 12\}$ Also the correct solution for graphs with loops.

- (c) (3 points) The subgraph induced by which 5 vertices have a total degree (the sum of their degrees) of 0?

Solution: 5, 7, 8, 9, 11

Name:

If you have a graph with loops, then the answer is there is no such induced graph.

Name:

9. (12 points) Between 1 and 1000 (both exclusive) how many numbers are divisible by 3, 5 or 7?

Solution: First find the sets of multiples of 3, 5, and 7 between 1 and 1000:

$$S_3 = \{3, \dots, 999\}$$

$$S_5 = \{5, \dots, 995\}$$

$$S_7 = \{7, \dots, 994\}$$

Now find the cardinalities of these sets:

$$|S_3| = 999/3 = 333$$

$$|S_5| = 995/5 = 199$$

$$|S_7| = 994/7 = 142$$

Similarly find:

$$S_{15} = \{15, \dots, 990\}$$

$$S_{21} = \{21, \dots, 987\}$$

$$S_{35} = \{35, \dots, 980\}$$

$$S_{105} = \{105, \dots, 945\}$$

$$|S_{15}| = 990/15 = 66$$

$$|S_{21}| = 987/21 = 47$$

$$|S_{35}| = 980/35 = 28$$

$$|S_{105}| = 945/105 = 9$$

Using inclusion-exclusion principle:

$$333 + 199 + 142 - 66 - 47 - 28 + 9 = 542$$