

**BBM 205 - Discrete Structures Final Exam**  
**Date: 7.1.2016, Time: 9:30 - 11:00 (90 minutes)**

Please answer 5 out of 6 questions.  
Circle the questions you answered.

**Ad Soyad / Name:**

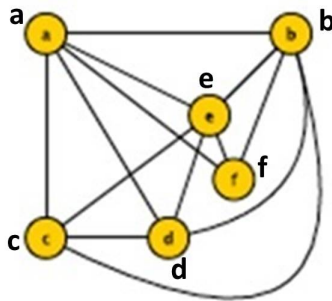
**Öğrenci No /Student ID:**

**Şube /Section: 1-2: Haşmet Gürçay (Morning, Afternoon)**

**3: Lale Özkahya**

Question	1	2	3	4	5	6	Total
Points	20	20	20	20	20	20	100
Grade							

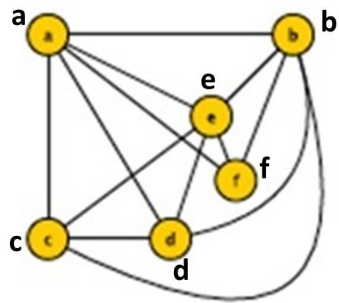
1. (20 points) Consider the following graph G.



- (a) Find a Hamilton path in G.
- (b) Find a subgraph of G that is isomorphic to  $K_4$ .
- (c) Find a subgraph of G that is homeomorphic to  $K_5$ . Is G planar?
- (d) Is G Eulerian? Justify your answer.
- (e) Find two non-isomorphic spanning trees of G.
- (f) Give a list of 5 non-negative integers that cannot be the degree list of a graph on 5 vertices.

**You can use the back of this page to answer Question 1.**

(The figure copied from Page 1)

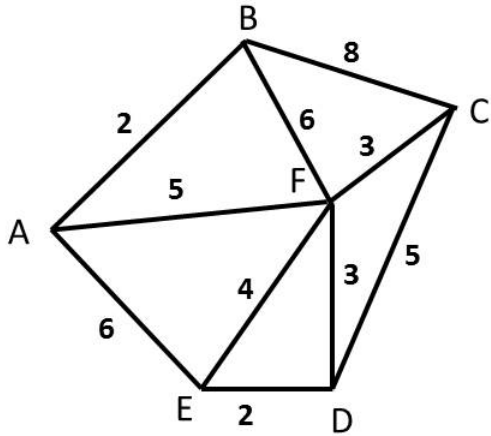


2. (20 points) Find the solution of the recurrence relation

$$a_n = 8a_{n-1} - 16a_{n-2}$$

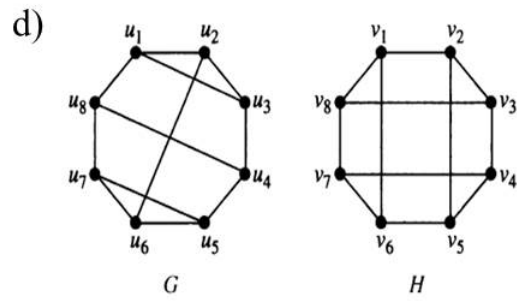
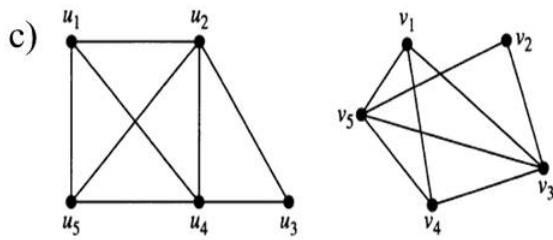
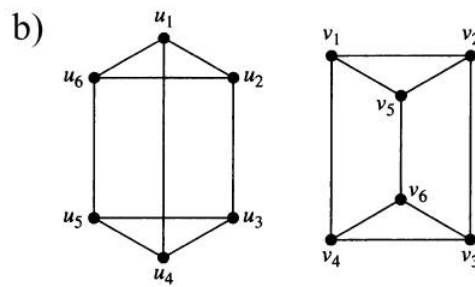
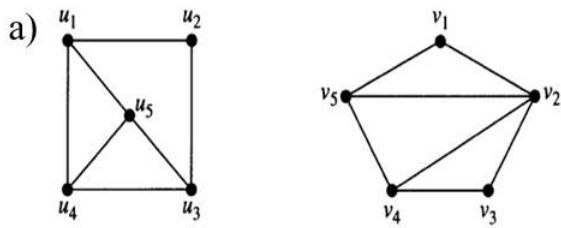
with initial conditions  $a_0 = 1$ ,  $a_1 = 7$ .

3. (20 points) Find a minimum spanning tree by using Prim's Algorithm for the following graph. SHOW EACH STEP OF THE ALGORITHM IN DETAIL.



4. (20 points) Show that  $2^n \geq n^2$  for every integer  $n \geq 4$ .

5. (20 points) Determine whether the given pair of graphs is isomorphic or not. Justify your answer.



6. (20 points) Encode (Find a code for) the sentence HAVE A HAPPY  
NEW YEAR using Huffman Code.